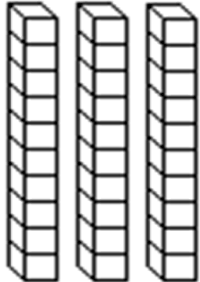
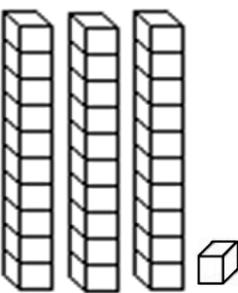
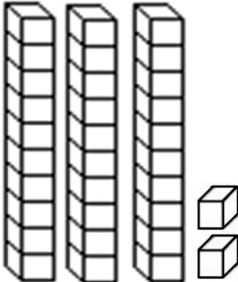
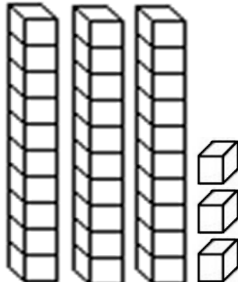
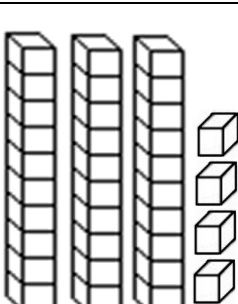
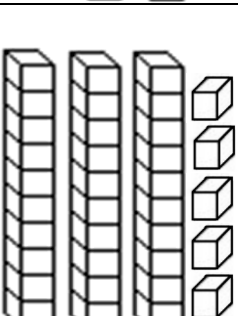


1. Observa o exemplo e completa.

30		$10 + 10 + 10 = 30$	trinta _____
31		$\boxed{30} + \boxed{1} = \boxed{}$	_____
32		$\boxed{} + \boxed{} = \boxed{}$	_____
33		$\boxed{} + \boxed{} = \boxed{}$	_____
34		$\boxed{} + \boxed{} = \boxed{}$	_____
35		$\boxed{} + \boxed{} = \boxed{}$	_____

36		$\square = \square = \square$	
37		$\square + \square = \square$	
38		$\square + \square = \square$	
39		$\square + \square = \square$	
40		$\square + \square + \square + \square = \square$	quarenta

2. Completa a reta numérica escrevendo os números que faltam.

